



Circus Math

How many of each picture do you see? Add them up and write the number in the box!

1

1




+




=

2

2




+




=

2

1



+



=