

# Spring Word Problems

Created By  
Rachel Beck

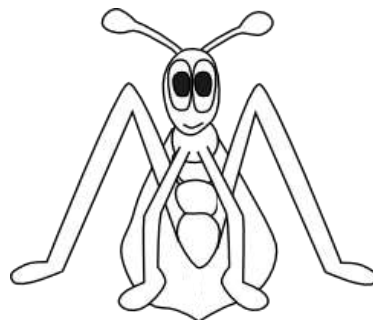


Graphics Provided by  
[Lovin' Lit &](#)  
[MyCuteGraphics](#)

Name: \_\_\_\_\_

Jim has 3 bugs. He got 4 more. How many bugs does he have now?

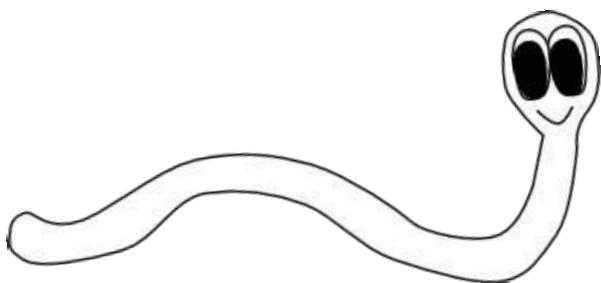
$$\underline{\hspace{2cm}} + \underline{\hspace{2cm}} = \underline{\hspace{2cm}}$$



Name: \_\_\_\_\_

Cam has 6 worms. He got  
3 more. How many worms  
does he have now?


\_\_\_\_\_ + \_\_\_\_\_ = \_\_\_\_\_



Name: \_\_\_\_\_

Kat has 7 flowers. She found 5 more. How many flowers does she have now?

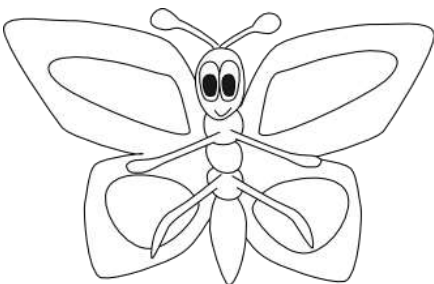
\_\_\_\_\_ + \_\_\_\_\_ = \_\_\_\_\_



Name: \_\_\_\_\_

Meg has 11 butterflies. She  
got 3 more. How many  
butterflies does she have now?

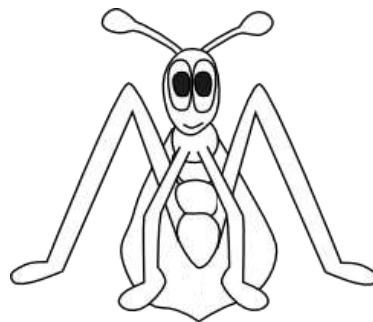
$$\underline{\hspace{2cm}} + \underline{\hspace{2cm}} = \underline{\hspace{2cm}}$$



Name: \_\_\_\_\_

Jim has 3 bugs. He lost 2  
of them. How many bugs  
are left?

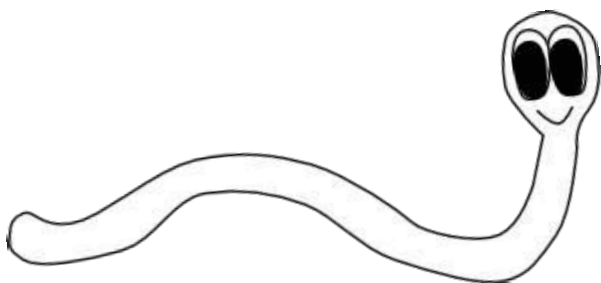
\_\_\_\_\_ - \_\_\_\_\_ = \_\_\_\_\_



Name: \_\_\_\_\_

Cam had 6 worms, but 3 of them crawled away. How many worms does he have left?


\_\_\_\_\_ - \_\_\_\_\_ = \_\_\_\_\_



Name: \_\_\_\_\_

Kat planted 7 flowers, but  
3 of them died. How many  
flowers does she have now?

\_\_\_\_\_ - \_\_\_\_\_ = \_\_\_\_\_





Name: \_\_\_\_\_

Meg has 12 butterflies. 8 of them flew away. How many butterflies are left?

\_\_\_\_\_ - \_\_\_\_\_ = \_\_\_\_\_

