


Name _____

Telling and Writing Time to the Hour

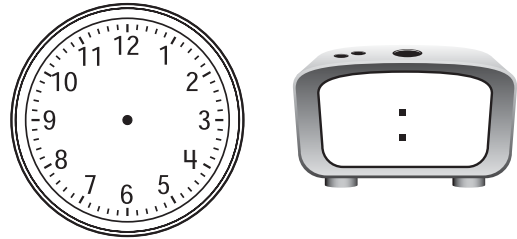
Draw the hands on each clock face.
Then write the time on the other clock.

1.




12 o'clock

2.




3 o'clock

3.



7 o'clock

4.



10 o'clock

Reasoning

5. Mark the clock that shows the same time as this clock.

(A)



(B)



(C)



(D)

