

# Franklin County School District

## School Closure Packet

Week ~~Four~~: April 13 – 17, 2020

Grade: PRE-K, K, , 2, 3, 4, 5, 6,  
7, 8, 9, 10, 11, 12 (Please circle)

Name:

---

Homeroom or First Period Teacher:

---

Dear Parents/Guardians,

We are in the last stretch of the year!!! We want to thank you for all of your help in making this year awesome!

For the 4<sup>th</sup> 9 weeks, the students will complete a research paper at home for a grade. Students will pick one of the following topics to write a paper on.

-Tundra    -Desert    -Forest    -Rainforest    -Ocean

In the paper, students must cover the following topics. Each topic must have at least two details. The topics will be used as headings

-habitat    -climate    -2 types of animals found    -2 kinds of plants found

\*Heading must be included

\*Must have a title

\*Paper must be handwritten by the student on notebook paper

\*Skip lines

\*Follow sentence rules (capitalization, punctuation)

\*Neatly written

\*Spaces between words

\*Must have student's name

Please cover the topics listed above. The papers are due by ~~April 25<sup>th</sup>~~ <sup>Week of May 4<sup>th</sup></sup>.

Thank You!

First Grade Team

This is an example of how the paper should be. We have identified the title and headings in parenthesis on the example paper. Students do not need to identify the title or headings on their paper.

## Franklin County (title)

By: Susie Jones

Franklin County is located in Southwest Mississippi. It was found in December of 1809. Its main town is Meadville, which is where the courthouse is located.

## Climate (heading)

Franklin County receives an average of 25-30 inches of rainfall each year. The average summer temperature is 85 degrees and the winter average is 40 degrees.

## Animals (heading)

One animal that is found in Franklin County is White Tail Deer. The deer shed their antlers during the spring and summer. They grow new antlers for the fall and winter. White Tail Deer eat grass and acorns. Another animal found here are cows. Many people raise cows for beef. Unlike deer, cows are kept in a fence. Cows eat grass, hay, and feed that is purchased by their owners.

## Rubric

This will be used to grade research papers, please use as a checklist while helping your child complete their paper.

ITEM	POINTS AVAILABLE	POINTS EARNED	NOTES
Title	10 points		
2 plants (4 sentences) 2 sentences each plant.	20 points		
2 animals (4 sentences) 2 sentences each animal.	20 points		
Climate (2 sentences)	10 points		
Habitat (2 sentences)	10 points		
Headings (4 headings- plants, animals, climate, habitat)	20 points		
Neatness	10 points		

Worth 100 POINTS

POINTS TOTAL:


Name \_\_\_\_\_

## Distinguish Shades of Meaning

**Directions:** John wants to give a bouquet of flowers to his mother. Read the words under the flowers. Circle the flower that has the strongest, most intense word from each group for John's bouquet.




### A MOTHER'S DAY BOUQUET




1.


happy



satisfied




ecstatic




2.

love



like



care




3.

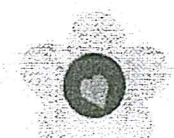
hopeful



sure



confident



4.


thrilled



cheerful




content




5.

decent



good



excellent



Name \_\_\_\_\_

MD 1.3.b Identify the days of the week, the number of days in a week, and the number of weeks in each month.

List the Days of the Week in order beginning with Sunday.

\_\_\_\_\_

\_\_\_\_\_

\_\_\_\_\_

\_\_\_\_\_

\_\_\_\_\_

\_\_\_\_\_

\_\_\_\_\_

How many days are in a week? \_\_\_\_\_

How many weeks are in a month? \_\_\_\_\_

What are the two weekend days? \_\_\_\_\_

Name \_\_\_\_\_

Lesson 7


# Time to the Half Hour: Analog

ESSENTIAL QUESTION ?

How do I determine length and time?




Math in My World



half past \_\_\_\_\_



**Teacher Directions:** Trace the hour hand red. Trace the minute hand blue. Use  to show the time. Write the time shown on the clock.




# Guided Practice

An analog clock can show time to the half hour.  
A half hour is 30 minutes.

## Helpful Hint


The hour hand points between the 4 and 5.  
The minute hand points to the 6. It is 4:30.



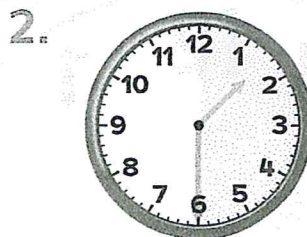
It is half past

4 or 4:30.

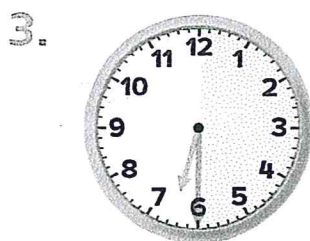
Use . Tell what time is shown. Write the time.



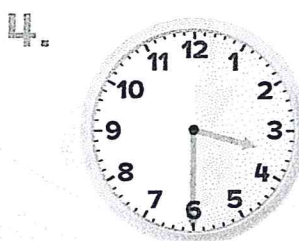
half past \_\_\_\_\_



half past \_\_\_\_\_



half past \_\_\_\_\_



half past \_\_\_\_\_

## Talk Math

It is half past 8. Explain what half past means.




Name \_\_\_\_\_

## Independent Practice


Use . Tell what time is shown. Write the time.

5.




half past \_\_\_\_\_

6.




half past \_\_\_\_\_

7.




half past \_\_\_\_\_

8.




half past \_\_\_\_\_

9.




half past \_\_\_\_\_

10.




half past \_\_\_\_\_

11.



half past \_\_\_\_\_

12.



half past \_\_\_\_\_




## Problem Solving



Processes  
& Practices


13. Jen's class is leaving for a field trip to the zoo at 10 o'clock. The class arrives at the zoo 30 minutes later. What time do they arrive at the zoo?

half past \_\_\_\_\_



## Brain Builders

14. Nate's football practice ends at 4:30. Show this time on the clock. If practice lasts one hour, what time did it start? Write the time.



half past \_\_\_\_\_

## Write Math

What is one difference between the minute hand and hour hand?

---

---

---

---

---

---

---

---



Name \_\_\_\_\_

## Lesson 7

Time to the Half Hour: Analog


# My Homework

Homework Helper




Need help? [connectED.mcgraw-hill.com](http://connectED.mcgraw-hill.com)

An analog clock can show time to the half hour.



half past 12




half past 7

## Practice


Tell what time is shown. Write the time.

1.




half past \_\_\_\_\_

2.




half past \_\_\_\_\_

3.



half past \_\_\_\_\_

4.



half past \_\_\_\_\_


### Helpful Hint

One half hour  
is 30 minutes.  
It is also called  
half past.




Tell what time is shown. Write the time.

5.



half past \_\_\_\_\_

6.



half past \_\_\_\_\_


7. Tim has swimming practice at 7:30.  
The swimming practice ends 30 minutes  
later. What time does it end?

\_\_\_\_\_

## Brain Builders

8. A bus picks Trish up at 9 o'clock. She ate  
breakfast 1 hour and 30 minutes earlier.  
What time did Trish eat breakfast?

half past \_\_\_\_\_





## Vocabulary Check



Circle the matching time.

9. A half hour or half  
past 12 o'clock.



**Math at Home** Give your child a time to the hour. Have him or her tell you  
where the clock hands would be for half past that hour.