


Name: _____

Date: _____ # _____



Add:


1. $5 + 9 =$ _____

2. $6 + 8 =$ _____

Subtract:

3. $13 - 6 =$ _____


4. $18 - 4 =$ _____



5. How many counters does he have on his ten frame?

6. A number has a 7 in the tens place and a 2 in the ones place. What is the number?

7. Draw a line to make 2 equal parts.

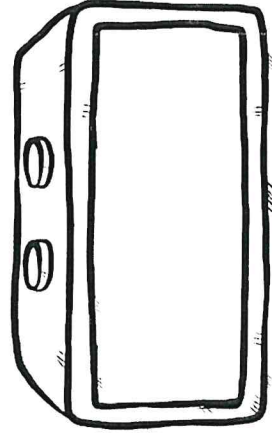


8. The class did math for 30 minutes before lunch. Then they did math for another 10 minutes after lunch. How many minutes did they do math in all?

9. How many students like reading the best?


	Favorite Subject		
social studies			
reading			
writing			

10. The bus comes at seven-thirty each morning. Show how to write that time.



#	answer
1	
2	
3	
4	
5	
6	
7	
8	
9	
10	

Name: _____ # _____



#	answer
1	
2	
3	
4	
5	
6	
7	
8	
9	
10	

Date: _____

Add:

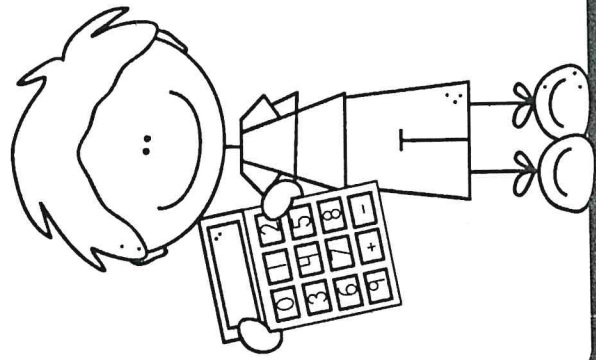
1. $9 + 4 =$ _____

2. $3 + 14 =$ _____

Subtract:

3. $16 - 14 =$ _____

4. $19 - 15 =$ _____




5. Fill in the missing number.

$8 + \underline{\quad} = 10$

6. Compare the two numbers by writing $>$, $<$, or $=$ in the circle.

15 ○ 13

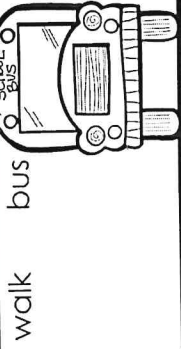
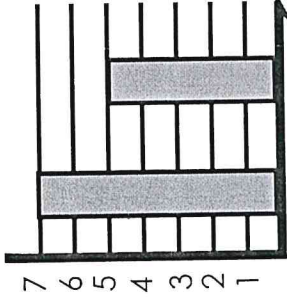
7. Name this shape.



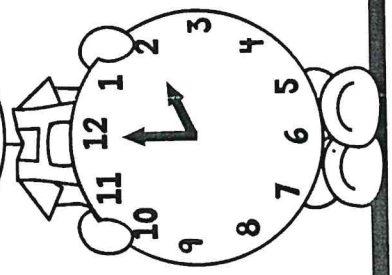

8. Ben used 8 apples to make a pie. Sue used seven apples to make a pie. How many apples did they use in all?

9. How many kids walk to school?

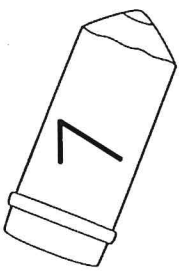
How Students Get to School



10. What time is it?



Name: _____ Date: _____ # _____



Add:


1. $12 + 7 =$ _____

2. $11 + 9 =$ _____

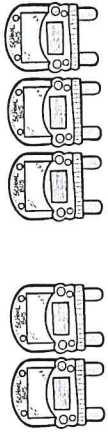
Subtract:

3. $9 - 6 =$ _____

4. $18 - 6 =$ _____



5. Which equation matches the pictures?




$3 + 4 = 7$ or $2 + 3 = 5$

6. Are the numbers in order?

28 29 31 30

7. How many triangles?



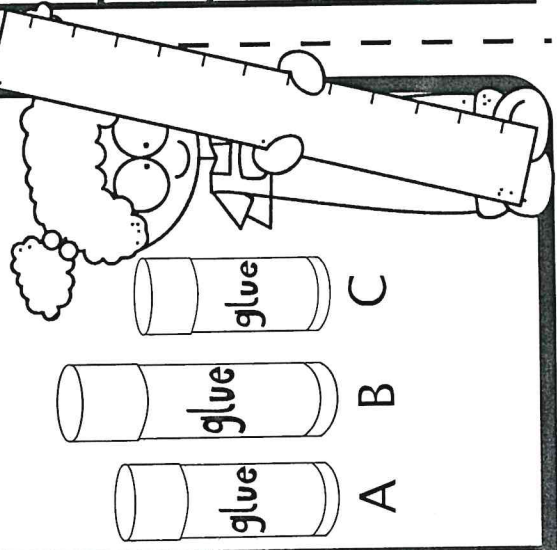
8. There were 8 kids on the bus. Seven more kids got picked up. How many kids are on the bus now?

9. How many kids like crayons the best?

Favorite Art Supply

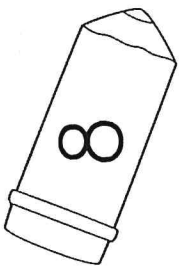
crayon	marker	paint

10. Which glue stick is the tallest?



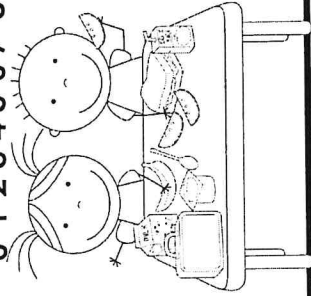
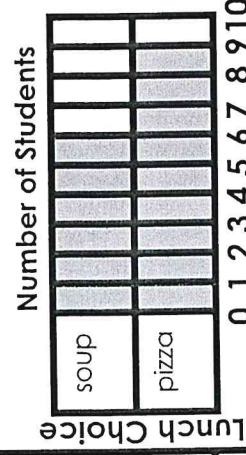
#	answer
1	
2	
3	
4	
5	
6	
7	
8	
9	
10	

Name: _____ Date: _____ # _____

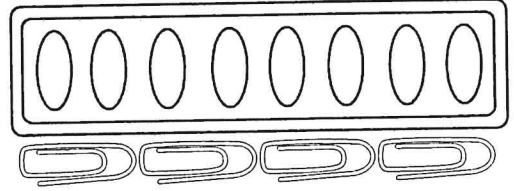


#	1	2	3	4	5	6	7	8	9	10
answer										

9. How many students ate soup?



10. How many paper clips long is the paint?



5. Use the number line to find the sum.

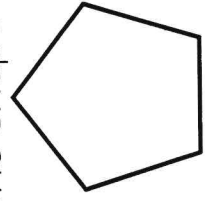


$5 + 3 = \square$

6. Write the missing number.

19	21	22	23
----	----	----	----

7. How many sides does the shape have?



8. It took Lily 13 steps to walk across Mrs. Smith's room. It took her 19 steps to walk across Mrs. Jay's room. How many steps longer is Mrs. Jay's room?

Add:


1. $5 + 8 = \underline{\quad}$

2. $8 + 11 = \underline{\quad}$

Subtract:

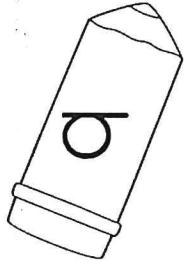
3. $14 - 5 = \underline{\quad}$

4. $19 - 7 = \underline{\quad}$



Name: _____

Date: _____ # _____



Add:

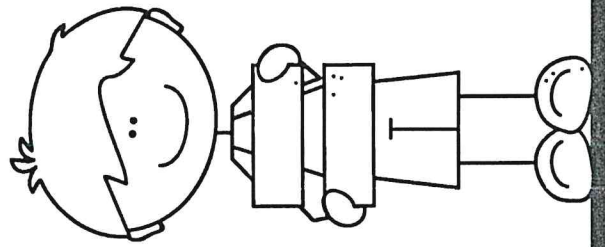
1. $7 + 11 =$ _____

2. $9 + 7 =$ _____

Subtract:

3. $17 - 8 =$ _____

4. $11 - 3 =$ _____




5. Is the equation true or false?

$$4 + 3 = 2 + 6$$

6. What number is 10 more?

50

7. Is the shape cut into thirds or fourths?



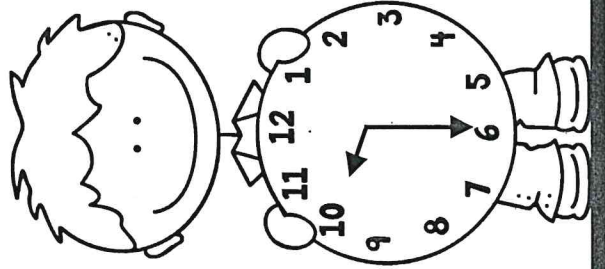
8. The class has 19 students. The room has 16 desks. How many more desks do they need?

9. How many boys are in the class?

Students in the Class

girls	### ##
boys	### ##

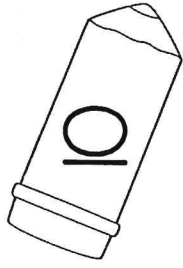
10. What time is it?



#	answer
1	
2	
3	
4	
5	
6	
7	
8	
9	
10	

Name: _____

Date: _____ # _____



Add:


1. $11 + 7 =$ _____

2. $4 + 15 =$ _____


Subtract:

3. $16 - 13 =$ _____

4. $20 - 13 =$ _____




5. How many more counters are needed to make 10?



6. A number has a 6 in the tens place and a 3 in the ones place. What is the number?

7. Draw a line to make 2 equal parts?



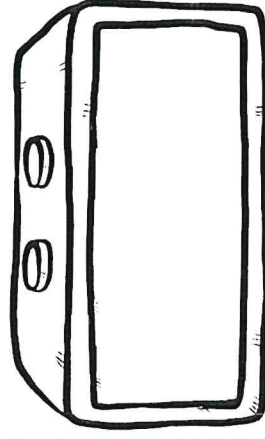
8. There are 20 markers and 8 crayons in Nick's desk. How many more markers than crayons does Nick have?

9. How many students like writing the best?

Favorite Subject

social studies	
reading	
writing	

10. Art class starts at nine-thirty each Friday. Show how to write that time.



#	answer
1	
2	
3	
4	
5	
6	
7	
8	
9	
10	