


kindergarten  
math  
assessments

Word Problems




By: Kristyn Hood

© 2018

Name: \_\_\_\_\_

Date: \_\_\_\_\_

## WORD PROBLEMS- ADDITION



Kate saw two birds flying. She saw three more birds fly through the sky. How many birds did she see?

$$\underline{\quad} + \underline{\quad} = \underline{\quad}$$


Mario had 6 buttons. His friend gave him 3 more. How many does he have now?

$$\underline{\quad} + \underline{\quad} = \underline{\quad}$$

Name: \_\_\_\_\_

Date: \_\_\_\_\_

## WORD PROBLEMS- ADDITION



Lilly's mom made cookies. Lilly ate 2 cookies. Her friends ate 6 cookies. How many cookies were eaten?

$$\underline{\quad} + \underline{\quad} = \underline{\quad}$$


Roman had 7 bears at his center. His friend came over and had 3 bears. How many bears did they have at the center in all?

$$\underline{\quad} + \underline{\quad} = \underline{\quad}$$

Name: \_\_\_\_\_

Date: \_\_\_\_\_

# WORD PROBLEMS- SUBTRACTION



There were 4 flowers in the garden. Two flowers were picked.  
How many flowers are left in the garden?

$$\underline{\quad} - \underline{\quad} = \underline{\quad}$$


Ron had 8 pencils. He gave 6 pencils to his friends. How many  
does he have left?

$$\underline{\quad} - \underline{\quad} = \underline{\quad}$$

Name: \_\_\_\_\_

Date: \_\_\_\_\_

# WORD PROBLEMS- SUBTRACTION



Brayden had 10 cupcakes. He gave 9 away. How many does he have left?

$$\underline{\quad} - \underline{\quad} = \underline{\quad}$$


Olivia had 9 stickers. She lost 6 stickers at recess. How many does she have now?

$$\underline{\quad} - \underline{\quad} = \underline{\quad}$$

Name: \_\_\_\_\_

Date: \_\_\_\_\_

## WORD PROBLEMS- MIXED



Mia had 8 pencils in her pencil box. She had to put 7 away. How many does she have now?

$$\square = \underline{\quad}$$


Damien found 4 paperclips on the ground. His friend found 5 more. How many paperclips did they find altogether?

$$\square = \underline{\quad}$$

Name: \_\_\_\_\_

Date: \_\_\_\_\_

## WORD PROBLEMS- MIXED



Ashley brought some marshmallows to school. She ate 5 of them for snack. Then she ate 2 more at lunch. How many marshmallows did she eat?

$$\square = \underline{\quad}$$

Sydney had 6 counters. She gave 3 to her neighbor to share. How many does she have left?

$$\square = \underline{\quad}$$

# Thank you!

Thank you so much for downloading this product. If you have any questions or concerns feel free to email me at [kristyn.hood@aol.com](mailto:kristyn.hood@aol.com)

## CREDITS

